

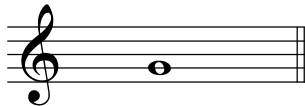
Chromatic Intervals VI

(Major, Minor, Perfect, Augmented and Diminished Intervals)


Write the note above the given note which completes the interval.

Example 


Aug 3

1 


dim 5

2 


m7

3 


Aug 7

4 


Aug 6

5 


dim 4

6 

P4

7 


M6

8 


m3

9 


Aug 3

10 


m6

11 


Aug 8

12 


P4

13 


m7

14 


dim 8

15 


m3

16 


M6

17 

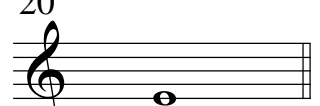
P5

18 

Aug 2

19 


dim 2

20 


M7

21 


Aug 5

22 

m7

23 

Aug 4

24 

dim 3